

**Solve each problem.****Answers**

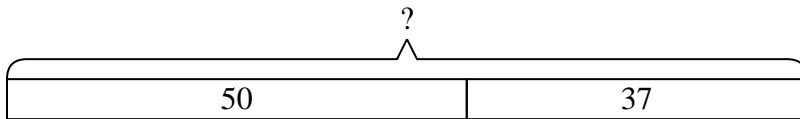
- 1) At the arcade Cody had won 50 tickets. Later he won 37 more tickets. How many tickets did Cody have total?
- 2) A pet store had 34 birds that talked and 21 that didn't. How many birds did the pet store have total?
- 3) On Facebook Debby had 18 photos of her friends and 48 photos of her family. How many photos did she have total?
- 4) Lana had 37 DS games and her friend had 42 games. How many do they have total?
- 5) Paige has 42 Playstation games and 18 Xbox games. How many games does she have total?
- 6) A grocery store had 50 bottles of regular soda and 49 bottles of diet soda. How many bottles did they have total?
- 7) Robin received 25 text messages before noon and another 39 after noon. How many text messages did Robin receive total?

1. \_\_\_\_\_
2. \_\_\_\_\_
3. \_\_\_\_\_
4. \_\_\_\_\_
5. \_\_\_\_\_
6. \_\_\_\_\_
7. \_\_\_\_\_

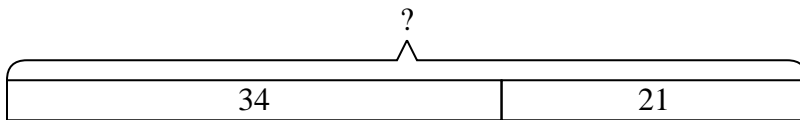


Solve each problem.

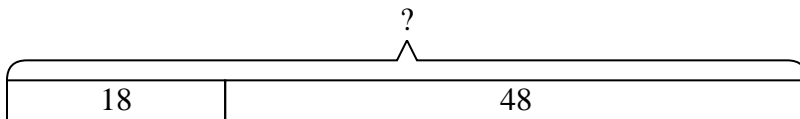
- 1) At the arcade Cody had won 50 tickets. Later he won 37 more tickets. How many tickets did Cody have total?



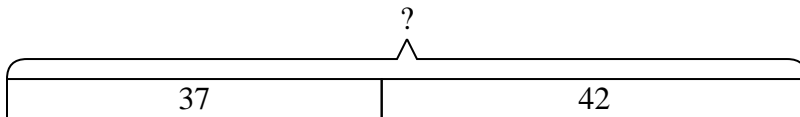
- 2) A pet store had 34 birds that talked and 21 that didn't. How many birds did the pet store have total?



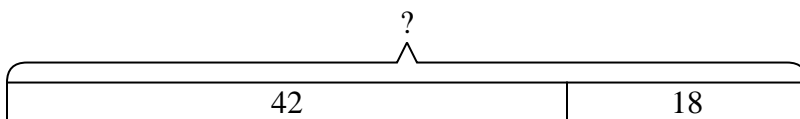
- 3) On Facebook Debby had 18 photos of her friends and 48 photos of her family. How many photos did she have total?



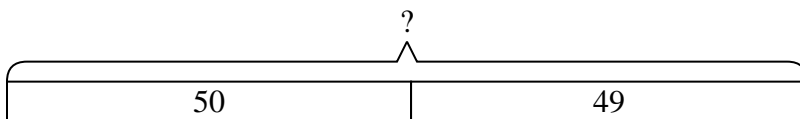
- 4) Lana had 37 DS games and her friend had 42 games. How many do they have total?



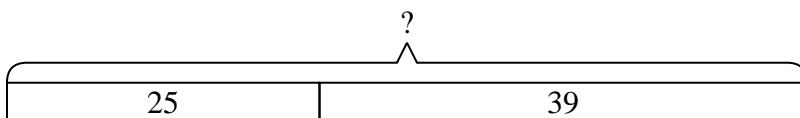
- 5) Paige has 42 Playstation games and 18 Xbox games. How many games does she have total?



- 6) A grocery store had 50 bottles of regular soda and 49 bottles of diet soda. How many bottles did they have total?



- 7) Robin received 25 text messages before noon and another 39 after noon. How many text messages did Robin receive total?

**Answers**

1. **87**  
2. **55**  
3. **66**  
4. **79**  
5. **60**  
6. **99**  
7. **64**